

Preverjanje znanja - računanje do 100

Matematika

Ime in priimek: _____

1. Seštej ali odštej.

$20 + 30 =$

$60 - 30 =$

$40 + 30 =$

$50 + 40 =$

$80 - 10 =$

$90 - 70 =$

$10 + 70 =$

$40 - 40 =$

$60 - 50 =$

$60 + 40 =$

$90 - 0 =$

$50 + 50 =$

$20 + 20 =$

$70 - 50 =$

$100 - 30 =$

$80 + 0 =$

$50 - 20 =$

$20 + 70 =$

___ / ___

2. Seštej ali odštej.

$50 + 2 =$ _____

$66 - 6 =$ _____

$4 + 20 =$ _____

$80 + 7 =$ _____

$73 - 3 =$ _____

$55 - 5 =$ _____

$8 + 40 =$ _____

$34 - 4 =$ _____

$30 + 9 =$ _____

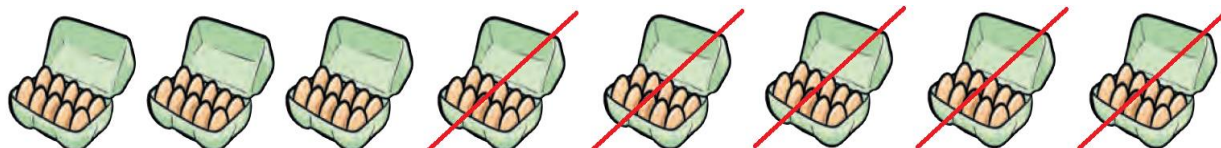
$1 + 60 =$ _____

$97 - 7 =$ _____

$49 - 9 =$ _____

___ / ___

3. Oglej si sliko. Napiši račun in izračunaj.



___ / ___

4. Seštej ali odštej.

$23 + 4 = \underline{\quad\quad}$ $78 - 5 = \underline{\quad\quad}$ $37 + 1 = \underline{\quad\quad}$

$77 + 2 = \underline{\quad\quad}$ $36 - 2 = \underline{\quad\quad}$ $44 - 3 = \underline{\quad\quad}$

$59 + 1 = \underline{\quad\quad}$ $50 - 6 = \underline{\quad\quad}$ $80 - 7 = \underline{\quad\quad}$




$6 + 31 = \underline{\quad\quad}$ $20 - 1 = \underline{\quad\quad}$ $56 + 4 = \underline{\quad\quad}$

$45 + 5 = \underline{\quad\quad}$ $69 - 0 = \underline{\quad\quad}$ $8 + 61 = \underline{\quad\quad}$

$3 + 87 = \underline{\quad\quad}$ $90 - 8 = \underline{\quad\quad}$ $29 - 8 = \underline{\quad\quad}$

___ / ___

5. Izmeri dolžine trakov.

	Meritev
A 	
B 	
C 	

Kateri trak je najdaljši?

Kateri trak je krajši od traku C?

___ / ___